



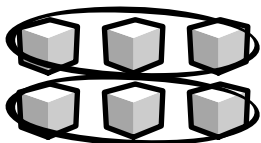
Add Blocker

Activity Sheet

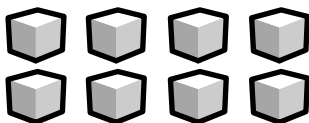
Name: _____ Class: _____

Circle the equal rows.


Write an equation that matches each array.




___ + ___ = ___




___ + ___ = ___




___ + ___ + ___ = ___



___ + ___ + ___ + ___ = ___



___ + ___ + ___ + ___ + ___ = ___

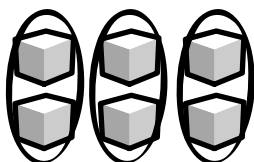


___ + ___ + ___ = ___

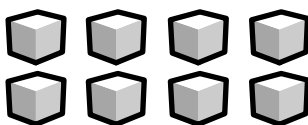


Circle the equal columns.


Write an equation that matches each array.




___ + ___ + ___ = ___



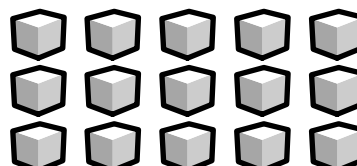
___ + ___ + ___ + ___ = ___



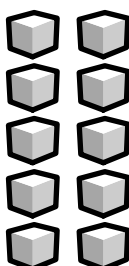
___ + ___ = ___



___ + ___ + ___ = ___



___ + ___ + ___ + ___ + ___ = ___



___ + ___ = ___