



Multiply to Mars

Activity Sheet

Name: _____ Class: _____

Circle the multiples of each number.

16



27

30

95

40

63

72

12

14



22

90

33


64

25

9

48

20



54

5

80

72

61

36

27

24



45

80

30


15

43

65

52

16



23

30

90


42

60

72

46

14



22

77

35


97

48

21

72

40



28

5

80

16

61

56

24

24



45

81

72

19

41

65

54

