



Odd Balls

Activity Sheet

Name: _____ Class: _____

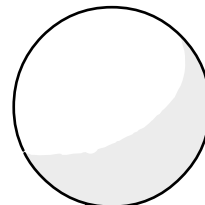
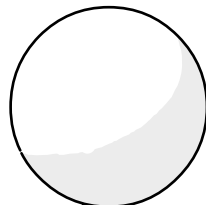
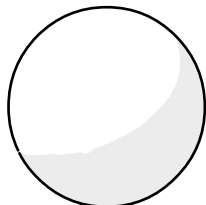
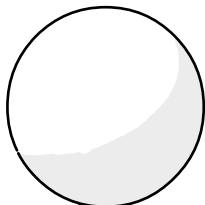
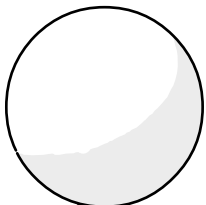
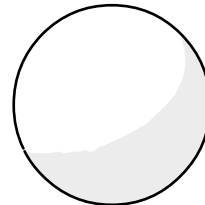
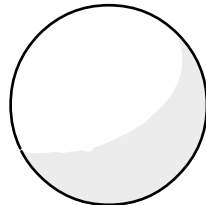
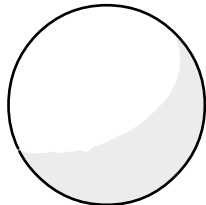
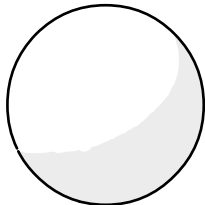
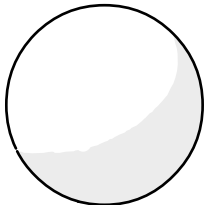
Circle all the even numbers.



Circle all the odd numbers.



Write all the odd numbers from 1 to 20 on the golf balls below.



Write all the even numbers from 1 to 20 on the golf balls below.

