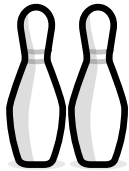
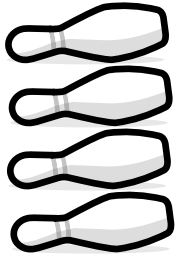


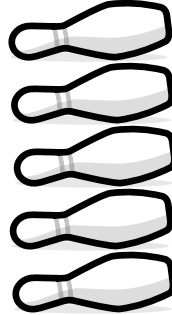


Name: _____ Class: _____


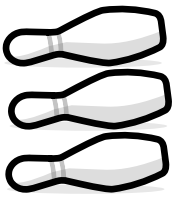
Count how many pins are knocked down.
Count how many pins are still standing.





$$\boxed{4} + \boxed{2} = 6$$




$$\boxed{} + \boxed{} = 6$$




$$\boxed{} + \boxed{} = 6$$



$$\boxed{} + \boxed{} = 6$$



$$\boxed{} + \boxed{} = 6$$



$$\boxed{} + \boxed{} = 6$$

