




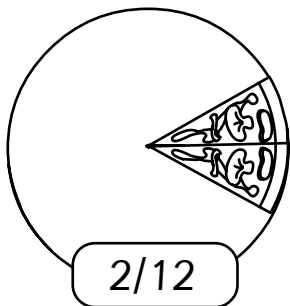

Pizza Delivery

Activity Sheet


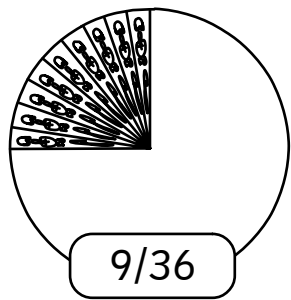

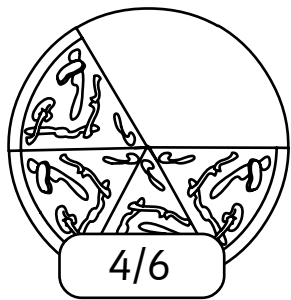
Name: _____ Class: _____

Granny was starving!
She'd ordered a pizza and was ready to eat it before Klara even came to the table!



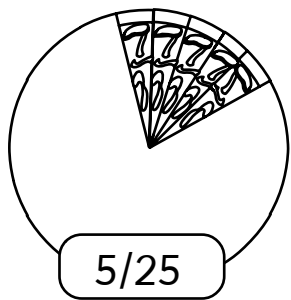
1 If Granny gobbled down more than $\frac{1}{4}$ of the pizza, which pizza shows how much pizza she ate?



2 If she ate more than $\frac{1}{3}$ of it, which pizza would she have eaten?



3 If she was really hungry and ate $\frac{2}{3}$ of it, which pizza would Granny have eaten?



4 When Klara wasn't looking, Granny ate more than $\frac{1}{2}$ of her pizza. Show three fractions that are more than $\frac{1}{2}$.

