



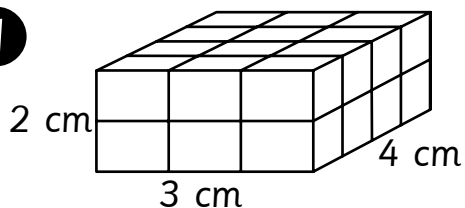
Volume Control

Activity Sheet

Name: _____ Class: _____

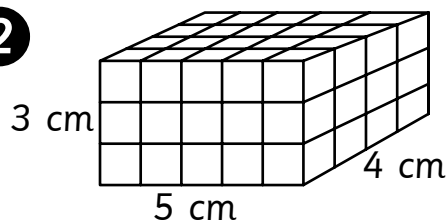
Find the volume of each figure.

1



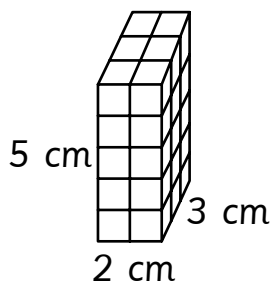
Volume = _____ cm^3

2



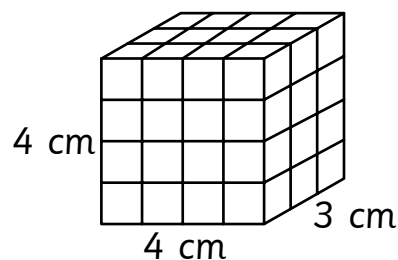
Volume = _____ cm^3

3



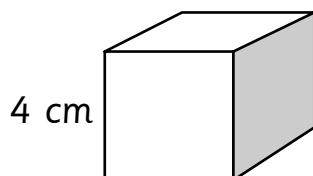
Volume = _____ cm^3

4



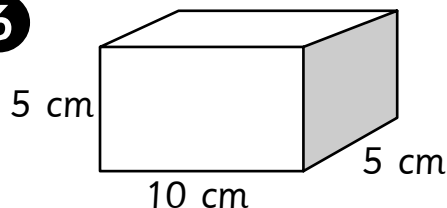
Volume = _____ cm^3

5



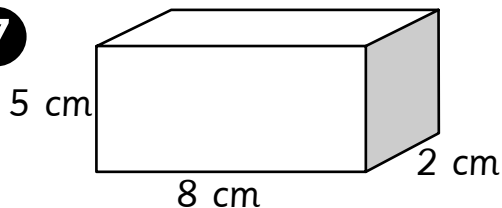
Volume = _____ cm^3

6



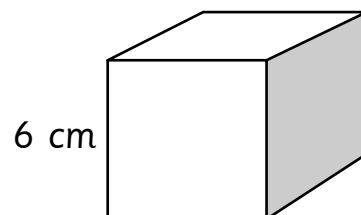
Volume = _____ cm^3

7



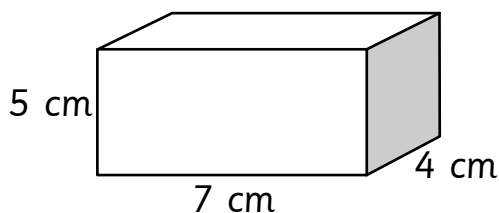
Volume = _____ cm^3

8



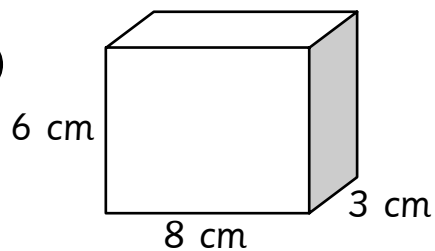
Volume = _____ cm^3

9



Volume = _____ cm^3

10



Volume = _____ cm^3

